



Name: \_\_\_\_\_

Date: \_\_\_\_\_

## “Weather and Me” Summative Assessment


1. Look at today’s weather. **Circle** one stamp in **each** row that best describes today’s weather.



2. What is today’s temperature? \_\_\_\_\_ ° F

3. How many units of water does the rain gauge show? \_\_\_\_\_

Look carefully at this weather picture.



4. What season is it? \_\_\_\_\_

5. Look at the above picture. Circle **at least two** pieces of clothing you would wear.



6. **Color** the thermometer to show the temperature outside.



These friends are ready to play outside.

7. Look at the picture above. Is it hot or cold outside? \_\_\_\_\_

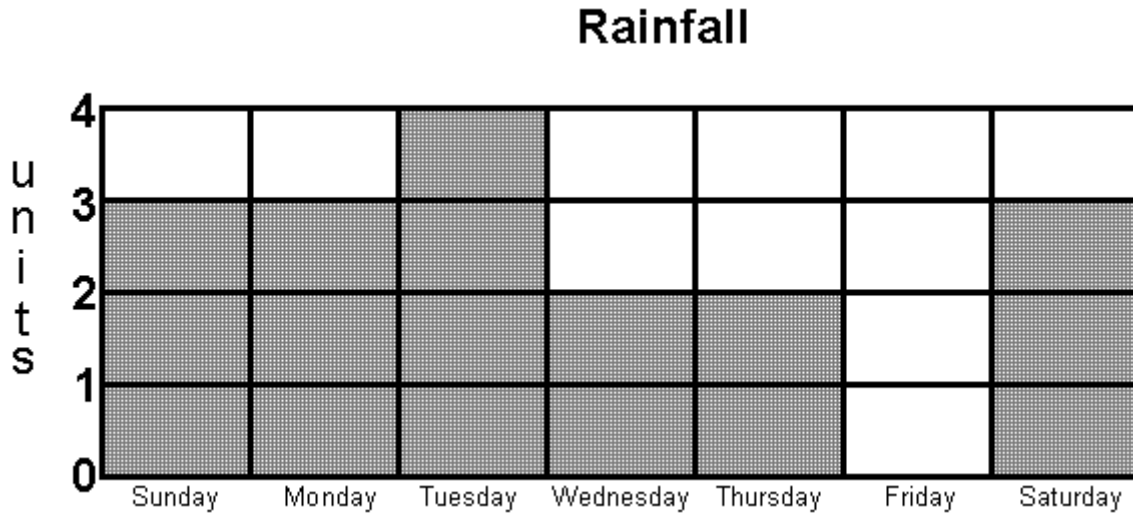
8. What will these friends play outdoors? \_\_\_\_\_

---

---

---

Look at the **Rainfall graph** below. Each block is one unit.



9. What day did it rain the most? \_\_\_\_\_

10. How many units of rain fell **altogether** during the week?

\_\_\_\_\_

11a. Use the **Rainfall graph** to choose the best day for going outside on a picnic.

The best day for a picnic is \_\_\_\_\_

11b. Why did you choose this day?

\_\_\_\_\_

\_\_\_\_\_

\_\_\_\_\_